



**Q1.** Ethanol can be oxidised by acidified potassium dichromate(VI) to ethanoic acid in a two-step process.



- (a) In order to ensure that the oxidation to ethanoic acid is complete, the reaction is carried out under reflux.

Describe what happens when a reaction mixture is refluxed and why it is necessary, in this case, for complete oxidation to ethanoic acid.

.....

.....

.....

.....

.....

.....

.....

.....

(3)

- (b) Write a half-equation for the overall oxidation of ethanol into ethanoic acid.

.....

(1)

- (c) The boiling points of the organic compounds in a reaction mixture are shown in the following table.

Compound	ethanol	ethanal	ethanoic acid
Boiling point / °C	78	21	118

Use these data to describe how you would obtain a sample of ethanal from a mixture of these three compounds. Include in your answer a description of the apparatus you would use and how you would minimise the loss of ethanal. Your description of the apparatus can be either a description in words or a labelled sketch.

.....

.....  
.....  
.....  
.....  
.....  
.....  
.....

(5)

- (d) Use your knowledge of structure and bonding to explain why it is possible to separate ethanal in this way.

.....  
.....  
.....  
.....  
.....

(2)

- (e) A student obtained a sample of a liquid using the apparatus in part (c).

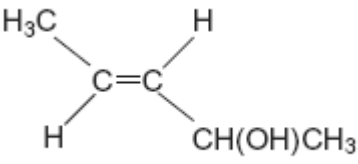
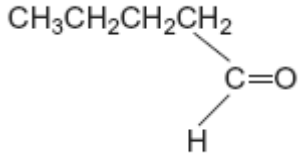
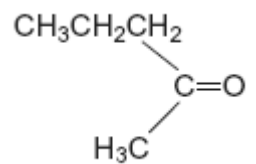
Describe how the student could use chemical tests to confirm that the liquid contained ethanal and did **not** contain ethanoic acid.

.....  
.....  
.....  
.....  
.....  
.....  
.....  
.....

(5)

(Total 16 marks)

**Q2.** The table below shows the structures of three isomers with the molecular formula  $C_5H_{10}O$

<p>Isomer 1</p> 	<p>(<i>E</i>)-pent-3-en-2-ol</p>
<p>Isomer 2</p> 	<p>pentanal</p>
<p>Isomer 3</p> 	

(a) Complete the table by naming Isomer 3.

(1)

(b) State the type of structural isomerism shown by these three isomers.

.....

(1)

(c) The compound (*Z*)-pent-3-en-2-ol is a stereoisomer of (*E*)-pent-3-en-2-ol.

(i) Draw the structure of (*Z*)-pent-3-en-2-ol.

(1)

- (ii) Identify the feature of the double bond in (*E*)-pent-3-en-2-ol and that in (*Z*)-pent-3-en-2-ol that causes these two compounds to be stereoisomers.

.....

(1)

- (d) A chemical test can be used to distinguish between separate samples of Isomer **2** and Isomer **3**.

Identify a suitable reagent for the test.

State what you would observe with Isomer **2** and with Isomer **3**.

Test reagent .....

Observation with Isomer **2**.....

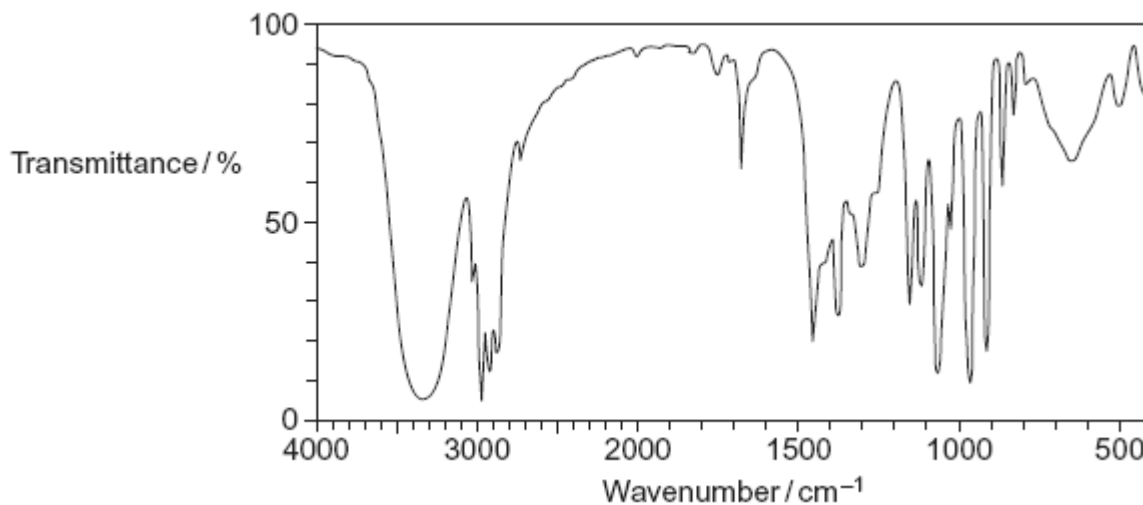
.....

Observation with Isomer **3**.....

.....

(3)

- (e) The following is the infrared spectrum of one of the isomers **1**, **2** or **3**.



- (i) Deduce which of the isomers (**1**, **2** or **3**) would give this infrared spectrum. You may find it helpful to refer to **Table 1** on the Data Sheet.

.....

(1)

- (ii) Identify two features of the infrared spectrum that support your deduction. In each case, identify the functional group responsible.

Feature 1 and functional group .....

.....

.....

.....

Feature 2 and functional group .....

.....

.....

.....

(2)  
(Total 10 marks)

**Q3.** Some alcohols can be oxidised by an acidified solution of potassium dichromate(VI). Aldehydes can be oxidised by Tollens' reagent or by Fehling's solution.

An unknown pure liquid **A** contains only a single alcohol. Outline a simple procedure to allow you to determine whether **A** is a primary, a secondary or a tertiary alcohol.

.....

.....

.....

.....

.....

.....

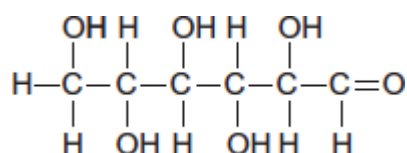
.....

.....

.....

**Q4.** Glucose is an organic molecule. Glucose can exist in different forms in aqueous solution.

(a) In aqueous solution, some glucose molecules have the following structure.

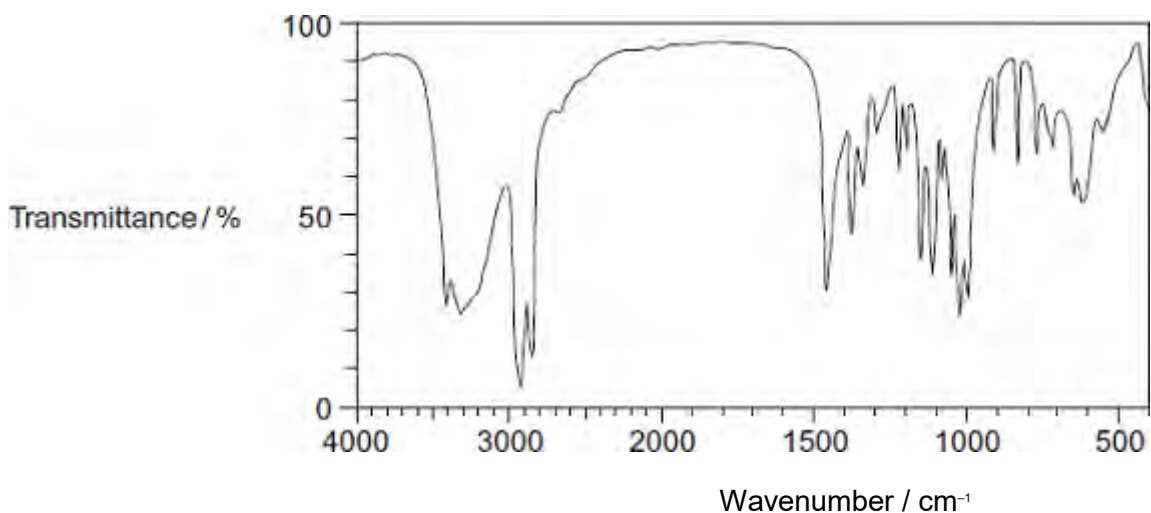


(i) Deduce the empirical formula of glucose.

.....

(1)

(ii) Consider the infrared spectrum of solid glucose.



State why it is possible to suggest that in the solid state very few molecules have the structure shown.

You may find it helpful to refer to **Table 1** on the Data Sheet.

.....

.....

(1)

(b) In the absence of oxygen, an aqueous solution of glucose can be fermented to produce ethanol for use in alcoholic drinks.

Write an equation for this fermentation reaction.  
Give **two** other essential conditions for the production of ethanol in this fermentation.

Equation

.....

Condition 1 .....

Condition 2 .....

(3)

- (c) Any ethanol present in the breath of a drinker can be detected by using a breathalyser.  
The ethanol is converted into ethanoic acid. The breathalyser has negative and positive electrodes. A current is measured and displayed in terms of alcohol content.

The overall redox equation is as follows



- (i) Draw the displayed formula for ethanoic acid.

(1)

- (ii) Deduce a half-equation for the reduction of atmospheric oxygen to water in acidic solution at one electrode of the breathalyser.

.....

(1)

- (iii) Deduce a half-equation for the oxidation of ethanol in water to ethanoic acid at the other electrode of the breathalyser.

.....

(1)



- (iv) The earliest breathalysers used laboratory chemicals to oxidise the ethanol to ethanoic acid. Detection was by a colour change.

Identify a reagent or combination of reagents that you would use in the laboratory to oxidise ethanol to ethanoic acid.

State the colour **change** that you would expect to see.

Reagent or combination of reagents .....

Colour change .....

(2)

- (d) The fermentation of glucose from crops is the main method for the production of ethanol. The product is called bioethanol. The European Union has declared that bioethanol is carbon-neutral.

- (i) State the meaning of the term *carbon-neutral*.

.....  
.....  
.....

(Extra space) .....

.....

(1)

- (ii) Other than carbon-neutrality, state the **main** advantage of the use of glucose from crops as the raw material for the production of ethanol.

.....  
.....

(1)

- (iii) Give *one* disadvantage of the use of crops for the production of ethanol.

.....  
.....

(1)

(Total 13 marks)

**Q5.** The reaction of butane-1,4-diol with butanedioic acid produces the polymer PBS used in biodegradable packaging and disposable cutlery.  
Butanedioic acid is produced by two different processes.

**Process 1**

- Aqueous sodium hydroxide reacts with 1,4-dibromobutane to make butane-1,4-diol.
- Butane-1,4-diol is oxidised to butanedioic acid.

**Process 2**

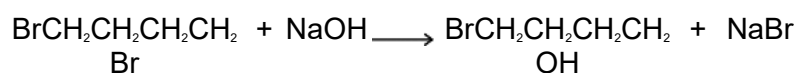
- Glucose reacts with carbon dioxide in the presence of microorganisms to produce butanedioic acid directly.
- The carbon dioxide used in this process is obtained from a local factory that produces bioethanol.

(a) Deduce **one** safety reason and one environmental reason why **Process 2** is preferred to **Process 1**.

.....  
 .....  
 .....  
 .....  
 .....  
 .....  
 .....  
 .....  
 (Extra space) .....  
 .....

(2)

(b) (i) Name and outline a mechanism for the following reaction that occurs in **Process 1**.

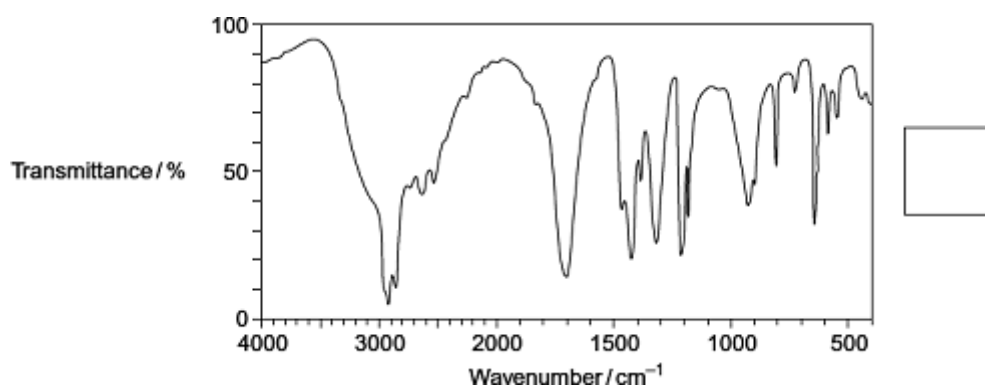
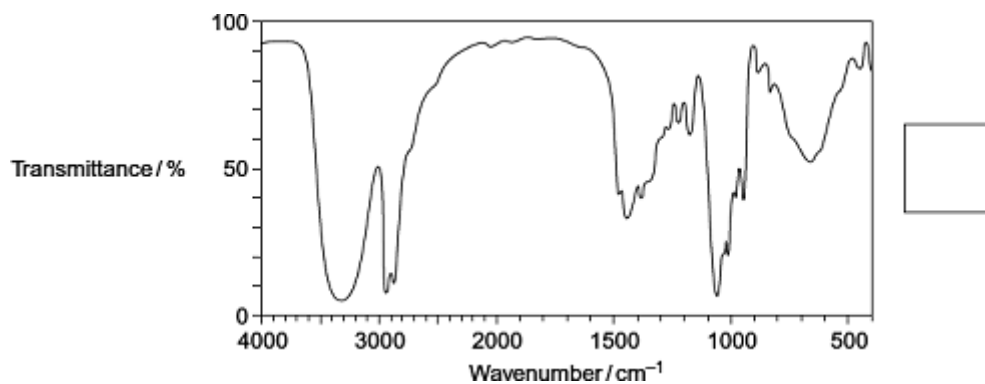


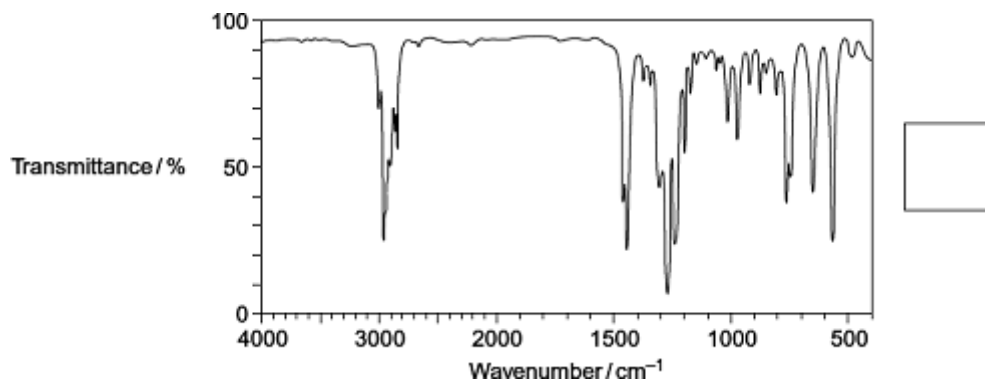
(3)

(ii) The infrared spectra shown are those of three compounds.

Compound **A** 1,4-dibromobutane  
Compound **B** butane-1,4-diol  
Compound **C** butanedioic acid

Identify the compound responsible for each spectrum by writing the correct letter, **A**, **B** or **C**, in the box next to each spectrum.  
You may find it helpful to refer to **Table 1** on the Data Sheet.





(3)

- (c) In the production of bioethanol, glucose ( $C_6H_{12}O_6$ ) is converted into a dilute aqueous solution of ethanol and carbon dioxide.

Give the name of this process and state **three** essential conditions necessary to produce a good yield of ethanol.

.....

.....

.....

.....

.....

.....

.....

.....

(Extra space) .....

.....

.....

(4)

- (d) State the class of alcohols to which the diol butane-1,4-diol belongs.

Identify a suitable reagent or combination of reagents for the conversion of butane-1,4-diol into butanedioic acid ( $HOOCCH_2CH_2COOH$ ).

Write an equation for this oxidation reaction using [O] to represent the oxidising agent.

.....

.....

.....  
.....  
.....  
.....  
.....  
(Extra space) .....  
.....  
.....

(3)  
(Total 15 marks)